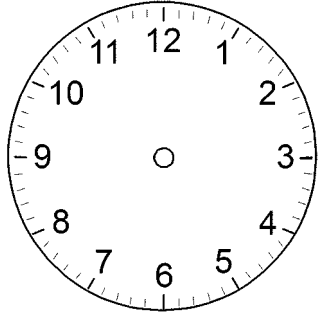


<b>Time: 10 Minutes</b>	<b>Paper Math 2</b>	<b>Total Marks: 10</b>
-------------------------	---------------------	------------------------

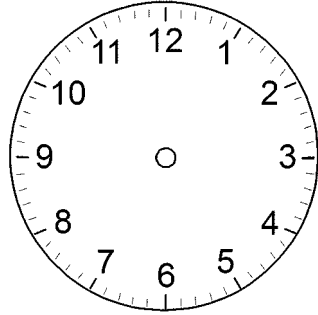
5th Month, 2nd Week, 3rd Day **Syllabus:** Drawing hands of the clock. Pg#127.

**Q.1. Read the time and draw hands of the clock. (10)**

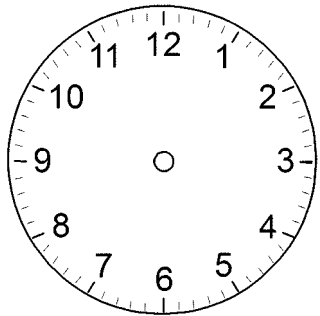
وقت پڑھیں اور گھڑی کی سوئیاں بنائیں۔



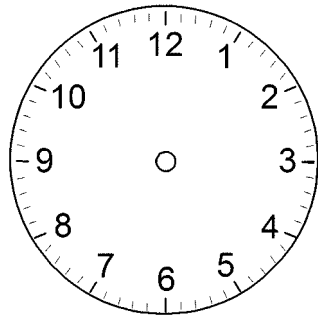
9 : 40



8 : 05



2 : 20



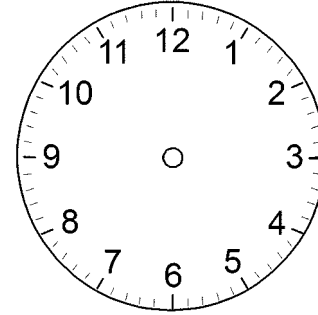
7 : 55

<b>Time: 10 Minutes</b>	<b>Paper Math 2</b>	<b>Total Marks: 10</b>
-------------------------	---------------------	------------------------

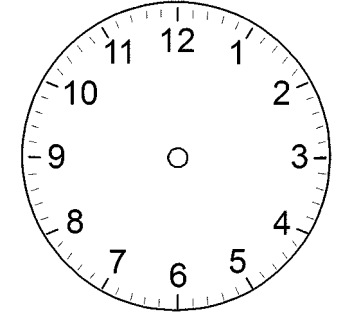
5th Month, 2nd Week, 3rd Day **Syllabus:** Drawing hands of the clock. Pg#127.

**Q.1. Read the time and draw hands of the clock. (10)**

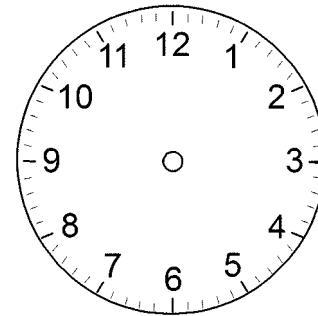
وقت پڑھیں اور گھڑی کی سوئیاں بنائیں۔



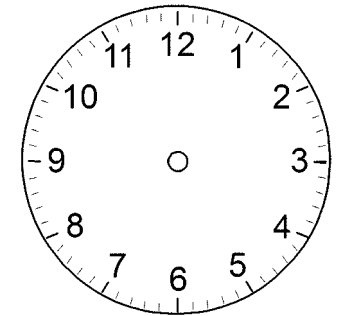
9 : 40



8 : 05



2 : 20



7 : 55